


Year 2 Fractions

How can we progress with fractions?

Recognise, find and name and write fractions $\frac{1}{3}$, $\frac{1}{4}$, $\frac{2}{4}$ and $\frac{3}{4}$ of a length, shape, set of objects or quantity.

Concrete

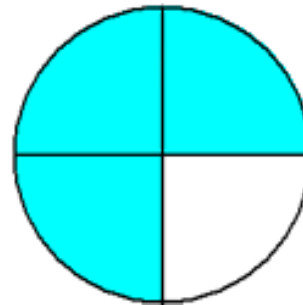


and recognise the $\frac{1}{2}$.



Write simple equivalence


Pictorial



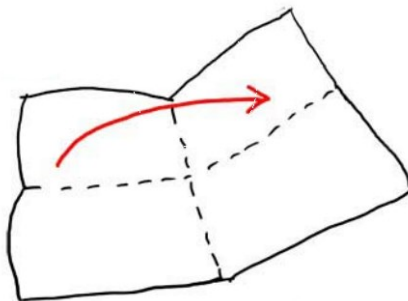
fractions of $\frac{2}{4}$ and

Abstract

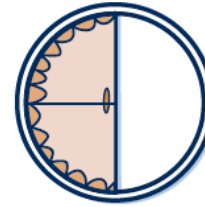
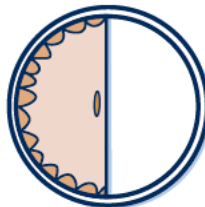
$$\frac{2}{4} \text{ of } 8 = \boxed{}$$



Concrete



Pictorial



I have $\frac{1}{2}$ a pie You have $\frac{2}{4}$ of a pie

Abstract

$$\frac{1}{2} \text{ of } 6 = \boxed{}$$

